



# RADIANT HEIGHTS ACADEMY

*From Radiant Minds to Great Heights*

0416-573-529 | 0412-838-455 | [Radiantheightsacademy@gmail.com](mailto:Radiantheightsacademy@gmail.com)

Student Name: \_\_\_\_\_

## Mathematics Booklet Level 3-4 Term 2 Week 2

### THIS WEEK'S FOCUS

- ✓ Understanding Fractions
- ✓ Comparing Fractions
- ✓ Converting Mixed Numbers to Improper Fractions

# Equivalent fractions

## Grade 4 Fractions Worksheet

Write in the missing fraction and color in the pie charts.

1)

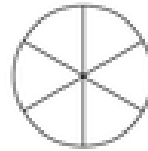


$$\frac{2}{8}$$

=

—

2)

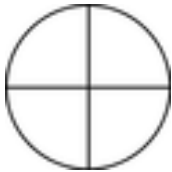


$$\frac{4}{6}$$

=

—

3)

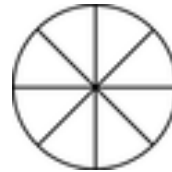


$$\frac{1}{4}$$

=

—

4)

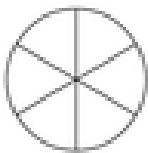


$$\frac{1}{8}$$

=

—

5)



$$\frac{2}{6}$$

=

—

6)



$$\frac{5}{8}$$

=

—

7)



$$\frac{2}{16}$$

=

—

8)



$$\frac{4}{8}$$

=

—

# Equivalent fractions

## Grade 4 Fractions Worksheet

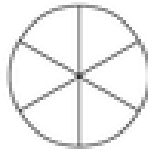
Write in the missing fraction and color in the pie charts.

1)



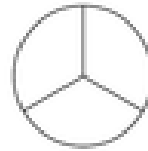
$$\frac{2}{3} =$$

=



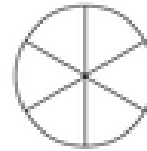
—

2)



$$\frac{1}{3} =$$

=



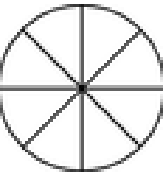
—

3)



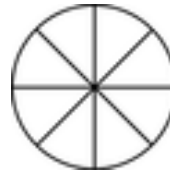
$$\frac{10}{16} =$$

=



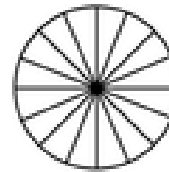
—

4)



$$\frac{4}{8} =$$

=



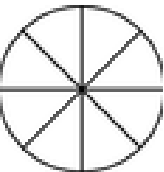
—

5)



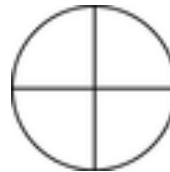
$$\frac{2}{16} =$$

=



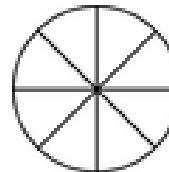
—

6)



$$\frac{1}{4} =$$

=



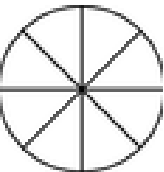
—

7)



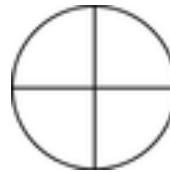
$$\frac{8}{16} =$$

=



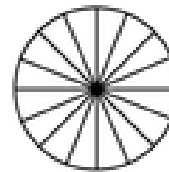
—

8)



$$\frac{1}{4} =$$

=



—

# Equivalent fractions

## Grade 4 Fractions Worksheet

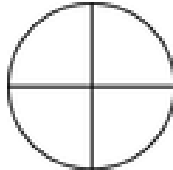
Write in the missing fraction and color in the pie charts.

1)



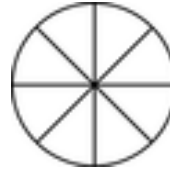
$$\frac{12}{16}$$

=



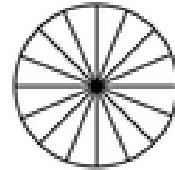
—

2)



$$\frac{6}{8}$$

=



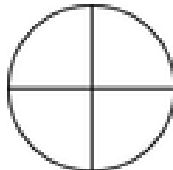
—

3)



$$\frac{4}{8}$$

=



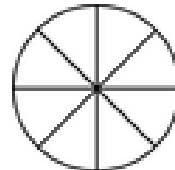
—

4)



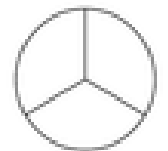
$$\frac{1}{2}$$

=



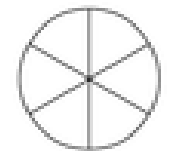
—

5)



$$\frac{2}{3}$$

=



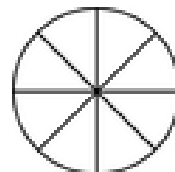
—

6)



$$\frac{2}{16}$$

=



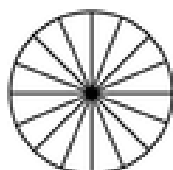
—

7)



$$\frac{7}{8}$$

=



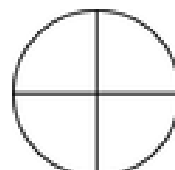
—

8)



$$\frac{2}{8}$$

=



—

# Equivalent fractions

## Grade 4 Fractions Worksheet

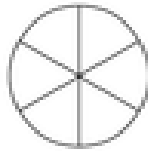
Write in the missing fraction and color in the pie charts.

1)



$$\frac{2}{3} =$$

=



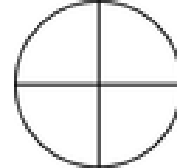
—

2)



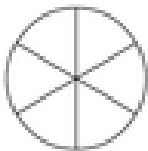
$$\frac{4}{16} =$$

=



—

3)



$$\frac{4}{8} =$$

=



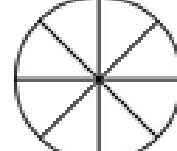
—

4)



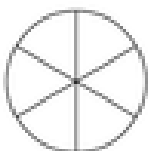
$$\frac{1}{4} =$$

=



—

5)



$$\frac{2}{6} =$$

=



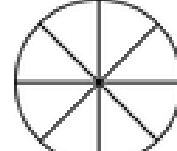
—

6)



$$\frac{12}{16} =$$

=



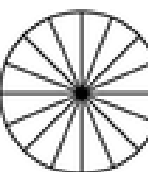
—

7)



$$\frac{3}{8} =$$

=



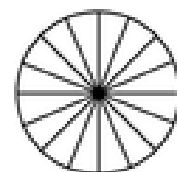
—

8)



$$\frac{4}{8} =$$

=



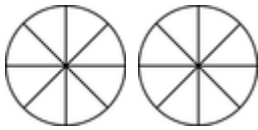
—

# Comparing proper & improper fractions

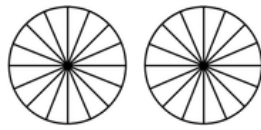
## Grade 4 Fractions Worksheet

Write > (greater than), < (less than) or = (equal to) between the fractions. Color in the fractions if it helps.

1)

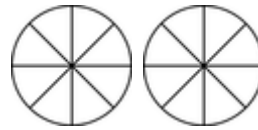


$$\frac{13}{8}$$

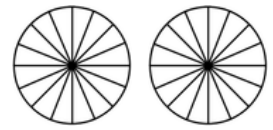


$$\frac{26}{16}$$

2)



$$\frac{10}{8}$$

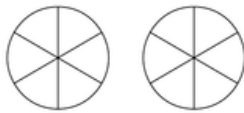


$$\frac{20}{16}$$

3)

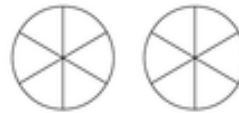


$$\frac{12}{16}$$



$$\frac{7}{6}$$

4)

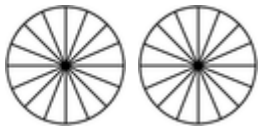


$$\frac{8}{6}$$

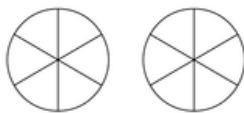


$$\frac{4}{3}$$

5)



$$\frac{21}{16}$$

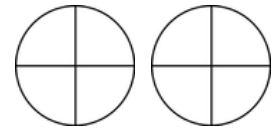


$$\frac{8}{6}$$

6)



$$\frac{14}{16}$$



$$\frac{5}{4}$$

7)



$$\frac{14}{16}$$

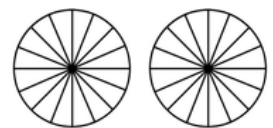


$$\frac{4}{3}$$

8)



$$\frac{7}{4}$$



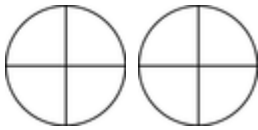
$$\frac{28}{16}$$

# Comparing proper & improper fractions

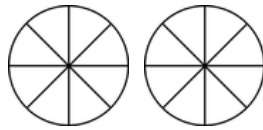
## Grade 4 Fractions Worksheet

Write > (greater than), < (less than) or = (equal to) between the fractions. Color in the fractions if it helps.

1)

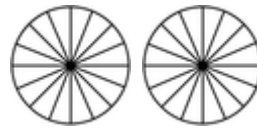


$$\frac{5}{4}$$

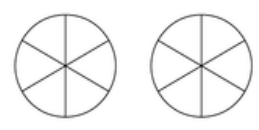


$$\frac{11}{8}$$

2)



$$\frac{18}{16}$$



$$\frac{7}{6}$$

3)

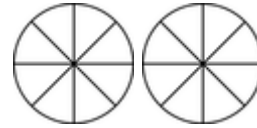


$$\frac{13}{16}$$

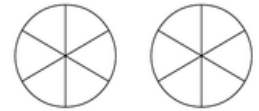


$$\frac{4}{3}$$

4)



$$\frac{12}{8}$$

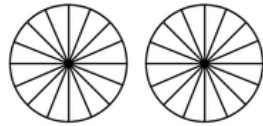


$$\frac{9}{6}$$

5)

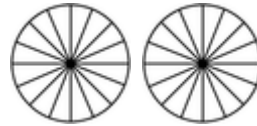


$$\frac{5}{6}$$

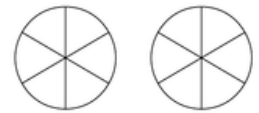


$$\frac{19}{16}$$

6)



$$\frac{21}{16}$$

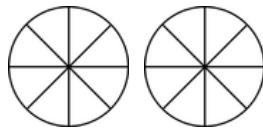


$$\frac{8}{6}$$

7)

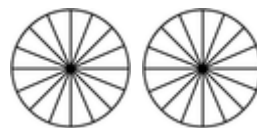


$$\frac{2}{3}$$

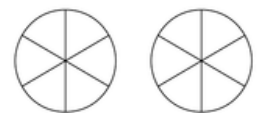


$$\frac{11}{8}$$

8)



$$\frac{27}{16}$$



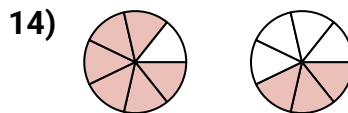
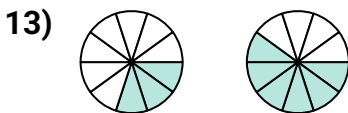
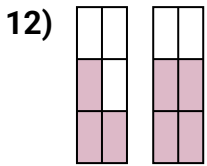
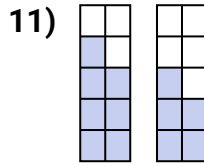
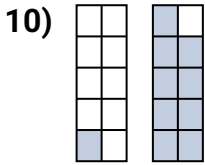
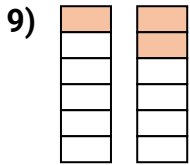
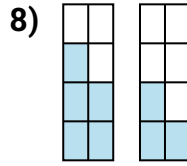
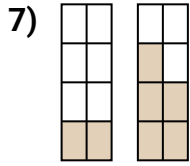
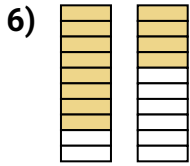
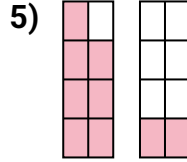
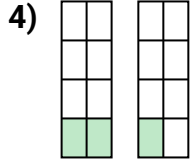
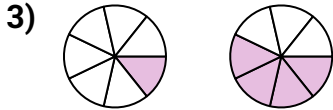
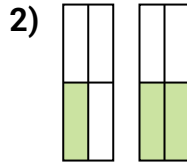
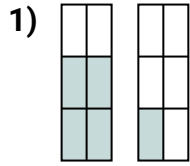
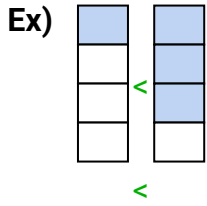
$$\frac{10}{6}$$



# Comparing Fractions

Name: \_\_\_\_\_

Compare the size of the fractions using  $<$ ,  $>$  or  $=$ .



## Answers

Ex.  $\frac{1}{4} < \frac{3}{4}$

1. \_\_\_\_\_

2. \_\_\_\_\_

3. \_\_\_\_\_

4. \_\_\_\_\_

5. \_\_\_\_\_

6. \_\_\_\_\_

7. \_\_\_\_\_

8. \_\_\_\_\_

9. \_\_\_\_\_

10. \_\_\_\_\_

11. \_\_\_\_\_

12. \_\_\_\_\_

13. \_\_\_\_\_

14. \_\_\_\_\_

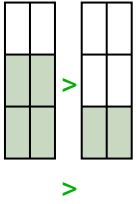


# Comparing Fractions

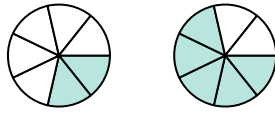
Name: \_\_\_\_\_

Compare the size of the fractions using  $<$ ,  $>$  or  $=$ .

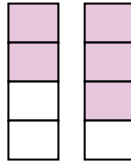
Ex)



1)



2)



## Answers

Ex.  $\frac{4}{6} > \frac{2}{6}$

1. \_\_\_\_\_

2. \_\_\_\_\_

3. \_\_\_\_\_

4. \_\_\_\_\_

5. \_\_\_\_\_

6. \_\_\_\_\_

7. \_\_\_\_\_

8. \_\_\_\_\_

9. \_\_\_\_\_

10. \_\_\_\_\_

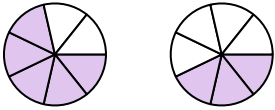
11. \_\_\_\_\_

12. \_\_\_\_\_

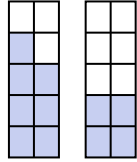
13. \_\_\_\_\_

14. \_\_\_\_\_

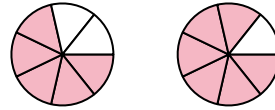
3)



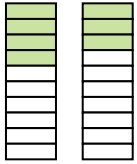
4)



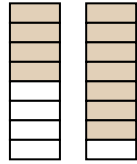
5)



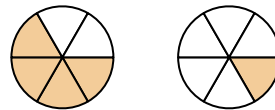
6)



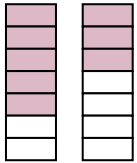
7)



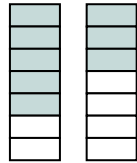
8)



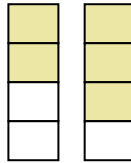
9)



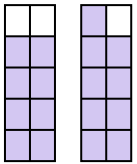
10)



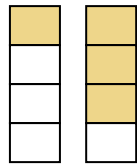
11)



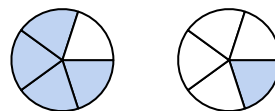
12)



13)



14)

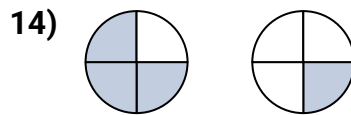
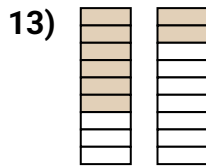
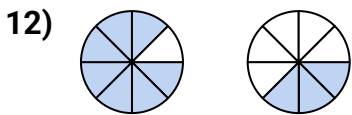
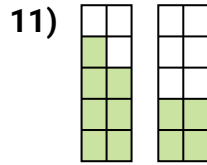
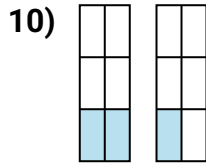
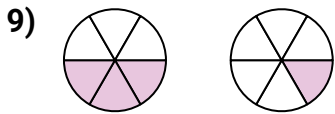
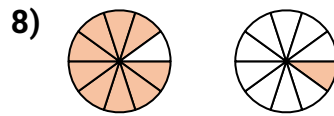
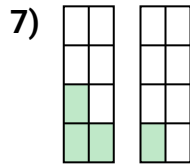
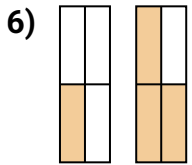
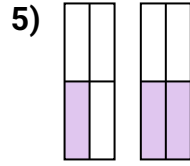
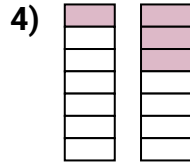
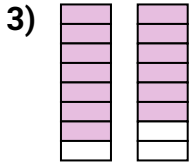
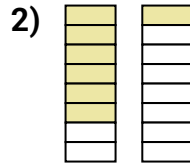
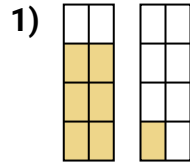
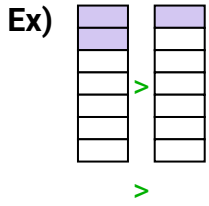




# Comparing Fractions

Name: \_\_\_\_\_

Compare the size of the fractions using  $<$ ,  $>$  or  $=$ .



## Answers

Ex.  $\frac{2}{7} > \frac{1}{7}$

1. \_\_\_\_\_

2. \_\_\_\_\_

3. \_\_\_\_\_

4. \_\_\_\_\_

5. \_\_\_\_\_

6. \_\_\_\_\_

7. \_\_\_\_\_

8. \_\_\_\_\_

9. \_\_\_\_\_

10. \_\_\_\_\_

11. \_\_\_\_\_

12. \_\_\_\_\_

13. \_\_\_\_\_

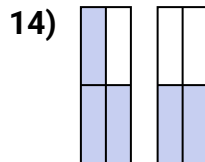
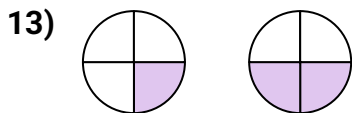
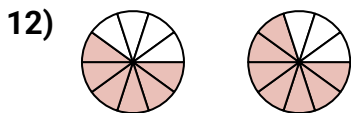
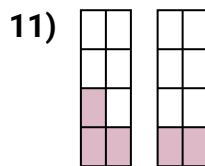
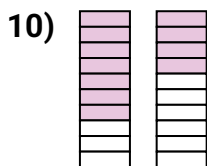
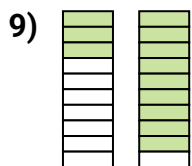
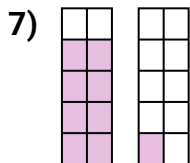
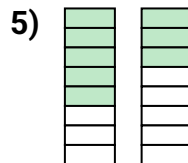
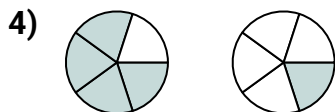
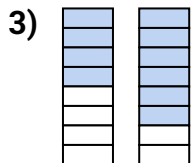
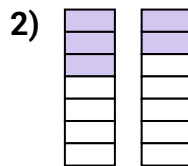
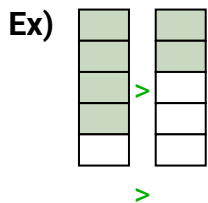
14. \_\_\_\_\_



# Comparing Fractions

Name: \_\_\_\_\_

Compare the size of the fractions using  $<$ ,  $>$  or  $=$ .



## Answers

Ex.  $\frac{4}{5} > \frac{2}{5}$

1. \_\_\_\_\_

2. \_\_\_\_\_

3. \_\_\_\_\_

4. \_\_\_\_\_

5. \_\_\_\_\_

6. \_\_\_\_\_

7. \_\_\_\_\_

8. \_\_\_\_\_

9. \_\_\_\_\_

10. \_\_\_\_\_

11. \_\_\_\_\_

12. \_\_\_\_\_

13. \_\_\_\_\_

14. \_\_\_\_\_



# Comparing Fractions

Name: \_\_\_\_\_

Use  $<$ ,  $>$  or  $=$  to compare the fractions.

Ex)  $\frac{1}{8} < \frac{4}{10}$

1)  $\frac{5}{10}$  \_\_\_\_\_  $\frac{1}{3}$

2)  $\frac{1}{5}$  \_\_\_\_\_  $\frac{5}{6}$

3)  $\frac{4}{8}$  \_\_\_\_\_  $\frac{4}{5}$

4)  $\frac{2}{6}$  \_\_\_\_\_  $\frac{8}{10}$

5)  $\frac{2}{5}$  \_\_\_\_\_  $\frac{2}{3}$

6)  $\frac{5}{12}$  \_\_\_\_\_  $\frac{4}{6}$

7)  $\frac{2}{3}$  \_\_\_\_\_  $\frac{4}{5}$

8)  $\frac{6}{8}$  \_\_\_\_\_  $\frac{4}{5}$

9)  $\frac{3}{8}$  \_\_\_\_\_  $\frac{2}{6}$

10)  $\frac{3}{4}$  \_\_\_\_\_  $\frac{9}{10}$

11)  $\frac{2}{4}$  \_\_\_\_\_  $\frac{3}{8}$

12)  $\frac{3}{10}$  \_\_\_\_\_  $\frac{1}{4}$

13)  $\frac{5}{10}$  \_\_\_\_\_  $\frac{3}{4}$

14)  $\frac{3}{5}$  \_\_\_\_\_  $\frac{1}{3}$

15)  $\frac{1}{3}$  \_\_\_\_\_  $\frac{1}{12}$

16)  $\frac{1}{10}$  \_\_\_\_\_  $\frac{3}{5}$

17)  $\frac{9}{10}$  \_\_\_\_\_  $\frac{6}{12}$

18)  $\frac{1}{10}$  \_\_\_\_\_  $\frac{3}{4}$

19)  $\frac{6}{8}$  \_\_\_\_\_  $\frac{2}{6}$

20)  $\frac{1}{10}$  \_\_\_\_\_  $\frac{2}{5}$

## Answers

Ex.  $<$

1. \_\_\_\_\_

2. \_\_\_\_\_

3. \_\_\_\_\_

4. \_\_\_\_\_

5. \_\_\_\_\_

6. \_\_\_\_\_

7. \_\_\_\_\_

8. \_\_\_\_\_

9. \_\_\_\_\_

10. \_\_\_\_\_

11. \_\_\_\_\_

12. \_\_\_\_\_

13. \_\_\_\_\_

14. \_\_\_\_\_

15. \_\_\_\_\_

16. \_\_\_\_\_

17. \_\_\_\_\_

18. \_\_\_\_\_

19. \_\_\_\_\_

20. \_\_\_\_\_



# Comparing Fractions

Name: \_\_\_\_\_

Use  $<$ ,  $>$  or  $=$  to compare the fractions.

Ex)  $\frac{2}{12} < \frac{4}{5}$

1)  $\frac{5}{12}$  \_\_\_\_\_  $\frac{3}{5}$

2)  $\frac{1}{4}$  \_\_\_\_\_  $\frac{1}{8}$

3)  $\frac{2}{5}$  \_\_\_\_\_  $\frac{7}{12}$

4)  $\frac{1}{4}$  \_\_\_\_\_  $\frac{4}{5}$

5)  $\frac{3}{6}$  \_\_\_\_\_  $\frac{3}{4}$

6)  $\frac{9}{10}$  \_\_\_\_\_  $\frac{1}{12}$

7)  $\frac{4}{12}$  \_\_\_\_\_  $\frac{3}{6}$

8)  $\frac{8}{10}$  \_\_\_\_\_  $\frac{2}{3}$

9)  $\frac{8}{10}$  \_\_\_\_\_  $\frac{1}{5}$

10)  $\frac{3}{12}$  \_\_\_\_\_  $\frac{9}{10}$

11)  $\frac{1}{8}$  \_\_\_\_\_  $\frac{6}{10}$

12)  $\frac{2}{3}$  \_\_\_\_\_  $\frac{9}{10}$

13)  $\frac{3}{5}$  \_\_\_\_\_  $\frac{1}{10}$

14)  $\frac{2}{5}$  \_\_\_\_\_  $\frac{1}{6}$

15)  $\frac{2}{8}$  \_\_\_\_\_  $\frac{2}{10}$

16)  $\frac{3}{5}$  \_\_\_\_\_  $\frac{2}{6}$

17)  $\frac{11}{12}$  \_\_\_\_\_  $\frac{2}{3}$

18)  $\frac{2}{3}$  \_\_\_\_\_  $\frac{3}{12}$

19)  $\frac{5}{10}$  \_\_\_\_\_  $\frac{8}{12}$

20)  $\frac{2}{4}$  \_\_\_\_\_  $\frac{3}{5}$

## Answers

Ex.  $<$

1. \_\_\_\_\_

2. \_\_\_\_\_

3. \_\_\_\_\_

4. \_\_\_\_\_

5. \_\_\_\_\_

6. \_\_\_\_\_

7. \_\_\_\_\_

8. \_\_\_\_\_

9. \_\_\_\_\_

10. \_\_\_\_\_

11. \_\_\_\_\_

12. \_\_\_\_\_

13. \_\_\_\_\_

14. \_\_\_\_\_

15. \_\_\_\_\_

16. \_\_\_\_\_

17. \_\_\_\_\_

18. \_\_\_\_\_

19. \_\_\_\_\_

20. \_\_\_\_\_



# Comparing Fractions

Name: \_\_\_\_\_

Use < , > or = to compare the fractions.

Ex)  $\frac{3}{5} > \frac{2}{6}$

1)  $\frac{1}{3}$  \_\_\_\_\_  $\frac{2}{5}$

2)  $\frac{2}{3}$  \_\_\_\_\_  $\frac{7}{10}$

3)  $\frac{3}{4}$  \_\_\_\_\_  $\frac{7}{12}$

4)  $\frac{4}{6}$  \_\_\_\_\_  $\frac{3}{5}$

5)  $\frac{8}{12}$  \_\_\_\_\_  $\frac{4}{10}$

6)  $\frac{8}{10}$  \_\_\_\_\_  $\frac{1}{5}$

7)  $\frac{4}{6}$  \_\_\_\_\_  $\frac{1}{4}$

8)  $\frac{2}{12}$  \_\_\_\_\_  $\frac{1}{4}$

9)  $\frac{8}{10}$  \_\_\_\_\_  $\frac{10}{12}$

10)  $\frac{3}{5}$  \_\_\_\_\_  $\frac{2}{12}$

11)  $\frac{1}{5}$  \_\_\_\_\_  $\frac{1}{3}$

12)  $\frac{1}{4}$  \_\_\_\_\_  $\frac{9}{12}$

13)  $\frac{1}{6}$  \_\_\_\_\_  $\frac{1}{4}$

14)  $\frac{1}{8}$  \_\_\_\_\_  $\frac{4}{10}$

15)  $\frac{5}{12}$  \_\_\_\_\_  $\frac{5}{10}$

16)  $\frac{3}{6}$  \_\_\_\_\_  $\frac{2}{3}$

17)  $\frac{6}{12}$  \_\_\_\_\_  $\frac{3}{5}$

18)  $\frac{6}{10}$  \_\_\_\_\_  $\frac{3}{8}$

19)  $\frac{8}{10}$  \_\_\_\_\_  $\frac{3}{8}$

20)  $\frac{4}{12}$  \_\_\_\_\_  $\frac{6}{8}$

## Answers

Ex. \_\_\_\_\_ > \_\_\_\_\_

1. \_\_\_\_\_

2. \_\_\_\_\_

3. \_\_\_\_\_

4. \_\_\_\_\_

5. \_\_\_\_\_

6. \_\_\_\_\_

7. \_\_\_\_\_

8. \_\_\_\_\_

9. \_\_\_\_\_

10. \_\_\_\_\_

11. \_\_\_\_\_

12. \_\_\_\_\_

13. \_\_\_\_\_

14. \_\_\_\_\_

15. \_\_\_\_\_

16. \_\_\_\_\_

17. \_\_\_\_\_

18. \_\_\_\_\_

19. \_\_\_\_\_

20. \_\_\_\_\_



# Comparing Fractions

Name: \_\_\_\_\_

Use  $<$ ,  $>$  or  $=$  to compare the fractions.

Ex)  $\frac{2}{8} < \frac{2}{5}$

1)  $\frac{1}{4}$  \_\_\_\_\_  $\frac{1}{12}$

2)  $\frac{2}{5}$  \_\_\_\_\_  $\frac{2}{4}$

3)  $\frac{2}{5}$  \_\_\_\_\_  $\frac{1}{6}$

4)  $\frac{9}{12}$  \_\_\_\_\_  $\frac{2}{4}$

5)  $\frac{2}{3}$  \_\_\_\_\_  $\frac{3}{8}$

6)  $\frac{3}{4}$  \_\_\_\_\_  $\frac{1}{6}$

7)  $\frac{3}{6}$  \_\_\_\_\_  $\frac{5}{8}$

8)  $\frac{2}{6}$  \_\_\_\_\_  $\frac{10}{12}$

9)  $\frac{4}{6}$  \_\_\_\_\_  $\frac{3}{5}$

10)  $\frac{10}{12}$  \_\_\_\_\_  $\frac{2}{3}$

11)  $\frac{5}{8}$  \_\_\_\_\_  $\frac{4}{5}$

12)  $\frac{9}{12}$  \_\_\_\_\_  $\frac{1}{3}$

13)  $\frac{3}{6}$  \_\_\_\_\_  $\frac{9}{12}$

14)  $\frac{3}{5}$  \_\_\_\_\_  $\frac{6}{10}$

15)  $\frac{3}{12}$  \_\_\_\_\_  $\frac{6}{8}$

16)  $\frac{4}{8}$  \_\_\_\_\_  $\frac{3}{5}$

17)  $\frac{2}{4}$  \_\_\_\_\_  $\frac{5}{8}$

18)  $\frac{3}{6}$  \_\_\_\_\_  $\frac{2}{5}$

19)  $\frac{1}{3}$  \_\_\_\_\_  $\frac{5}{12}$

20)  $\frac{10}{12}$  \_\_\_\_\_  $\frac{6}{10}$

## Answers

Ex.  $<$

1. \_\_\_\_\_

2. \_\_\_\_\_

3. \_\_\_\_\_

4. \_\_\_\_\_

5. \_\_\_\_\_

6. \_\_\_\_\_

7. \_\_\_\_\_

8. \_\_\_\_\_

9. \_\_\_\_\_

10. \_\_\_\_\_

11. \_\_\_\_\_

12. \_\_\_\_\_

13. \_\_\_\_\_

14. \_\_\_\_\_

15. \_\_\_\_\_

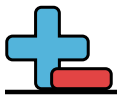
16. \_\_\_\_\_

17. \_\_\_\_\_

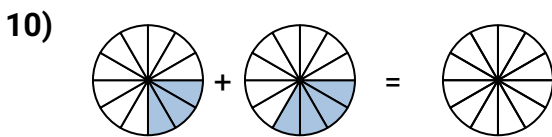
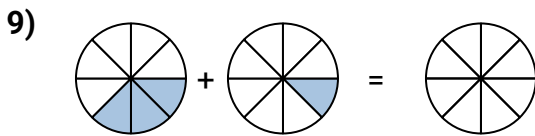
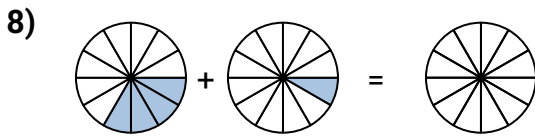
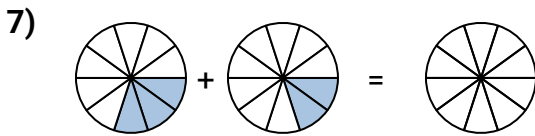
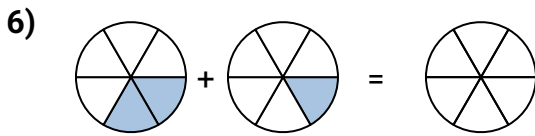
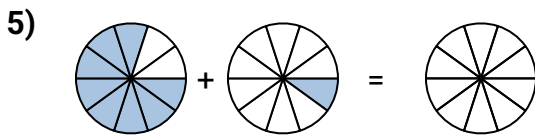
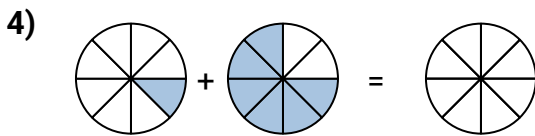
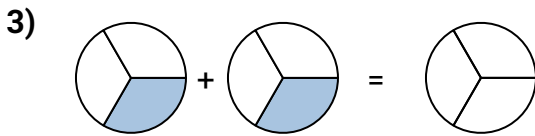
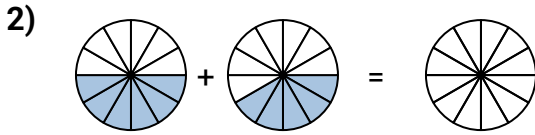
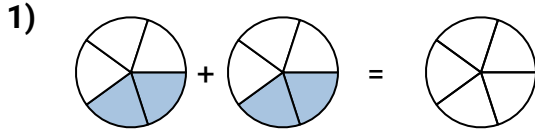
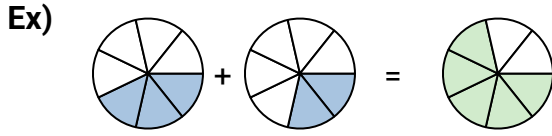
18. \_\_\_\_\_

19. \_\_\_\_\_

20. \_\_\_\_\_



Shade in the fraction to solve the problem.



**Answers**

Ex.  $\frac{3}{7}$   $\frac{2}{7}$   $\frac{5}{7}$

1. \_\_\_\_\_

2. \_\_\_\_\_

3. \_\_\_\_\_

4. \_\_\_\_\_

5. \_\_\_\_\_

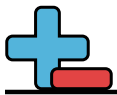
6. \_\_\_\_\_

7. \_\_\_\_\_

8. \_\_\_\_\_

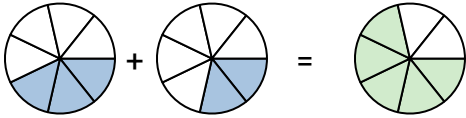
9. \_\_\_\_\_

10. \_\_\_\_\_



Shade in the fraction to solve the problem.

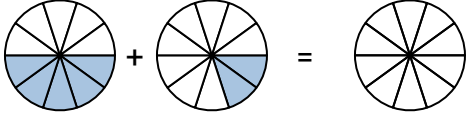
Ex)



**Answers**

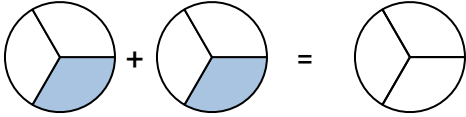
Ex. 3/7 2/7 5/7

1)



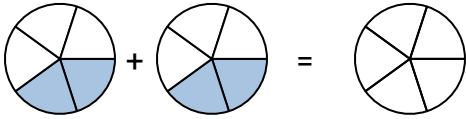
1. \_\_\_\_\_

2)



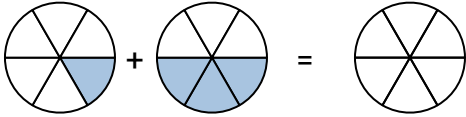
2. \_\_\_\_\_

3)



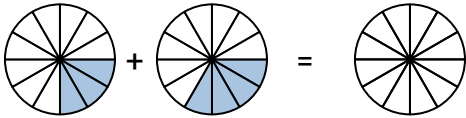
3. \_\_\_\_\_

4)



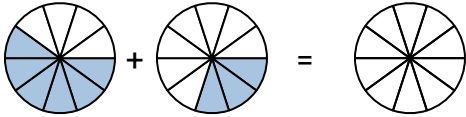
4. \_\_\_\_\_

5)



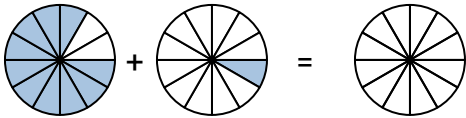
5. \_\_\_\_\_

6)



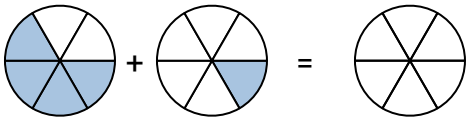
6. \_\_\_\_\_

7)



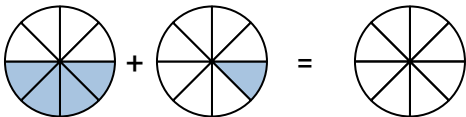
7. \_\_\_\_\_

8)



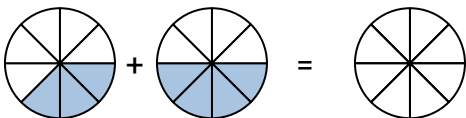
8. \_\_\_\_\_

9)

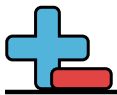


9. \_\_\_\_\_

10)

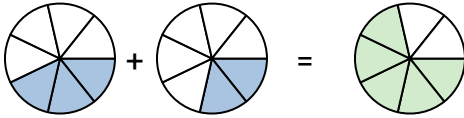


10. \_\_\_\_\_



Shade in the fraction to solve the problem.

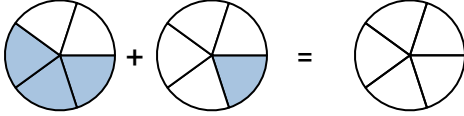
Ex)



**Answers**

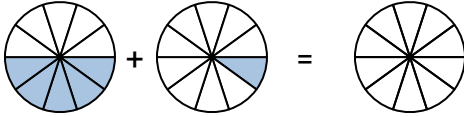
Ex. 3/7 2/7 5/7

1)



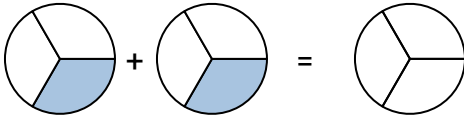
1. \_\_\_\_\_

2)



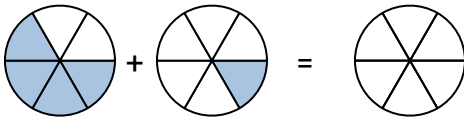
2. \_\_\_\_\_

3)



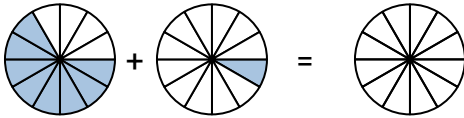
3. \_\_\_\_\_

4)



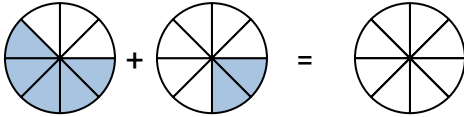
4. \_\_\_\_\_

5)



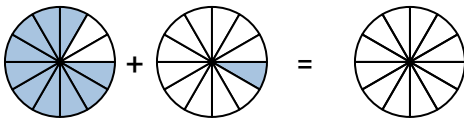
5. \_\_\_\_\_

6)



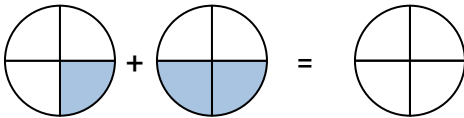
6. \_\_\_\_\_

7)



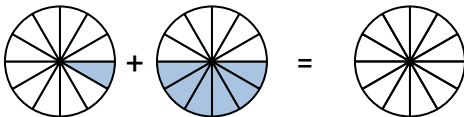
7. \_\_\_\_\_

8)



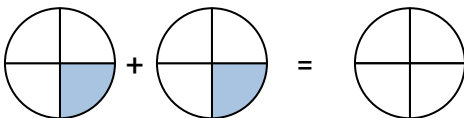
8. \_\_\_\_\_

9)



9. \_\_\_\_\_

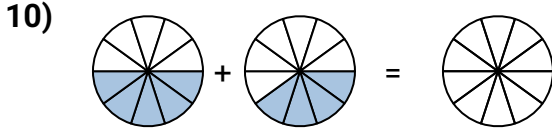
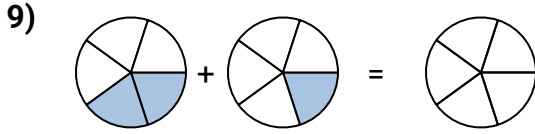
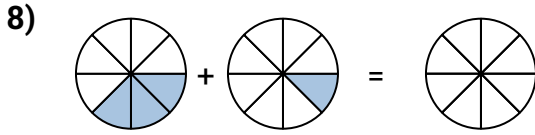
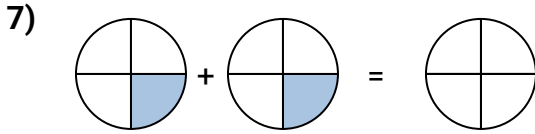
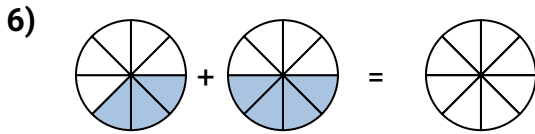
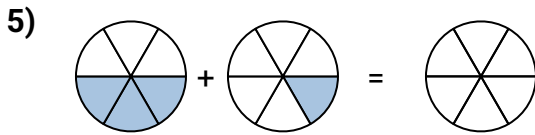
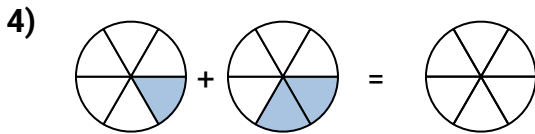
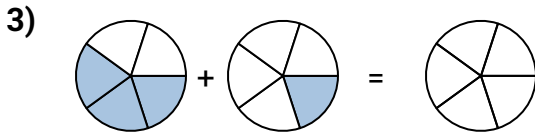
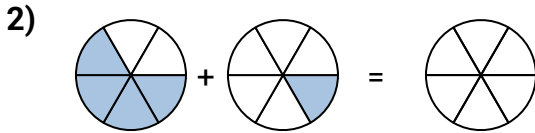
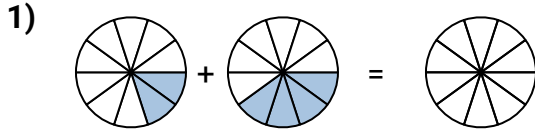
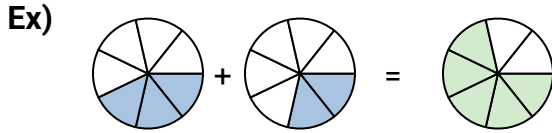
10)



10. \_\_\_\_\_



Shade in the fraction to solve the problem.



**Answers**

Ex.  $\frac{3}{7}$   $\frac{2}{7}$   $\frac{5}{7}$

1. \_\_\_\_\_

2. \_\_\_\_\_

3. \_\_\_\_\_

4. \_\_\_\_\_

5. \_\_\_\_\_

6. \_\_\_\_\_

7. \_\_\_\_\_

8. \_\_\_\_\_

9. \_\_\_\_\_

10. \_\_\_\_\_



Solve each problem.

1)  $\frac{6}{10} - \frac{5}{10} =$

2)  $\frac{3}{5} + \frac{2}{5} =$

3)  $\frac{4}{5} - \frac{3}{5} =$

4)  $\frac{9}{12} + \frac{3}{12} =$

5)  $\frac{4}{5} - \frac{2}{5} =$

6)  $\frac{5}{6} + \frac{1}{6} =$

7)  $\frac{5}{6} - \frac{4}{6} =$

8)  $\frac{7}{8} + \frac{6}{8} =$

9)  $\frac{8}{12} - \frac{4}{12} =$

10)  $\frac{2}{3} + \frac{1}{3} =$

11)  $\frac{5}{6} - \frac{2}{6} =$

12)  $\frac{2}{10} + \frac{1}{10} =$

13)  $\frac{3}{8} - \frac{2}{8} =$

14)  $\frac{5}{10} + \frac{5}{10} =$

15)  $\frac{2}{5} - \frac{1}{5} =$

16)  $\frac{10}{12} + \frac{6}{12} =$

17)  $\frac{10}{12} - \frac{1}{12} =$

18)  $\frac{7}{10} + \frac{2}{10} =$

19)  $\frac{3}{5} - \frac{2}{5} =$

20)  $\frac{2}{4} + \frac{1}{4} =$

**Answers**

1. \_\_\_\_\_

2. \_\_\_\_\_

3. \_\_\_\_\_

4. \_\_\_\_\_

5. \_\_\_\_\_

6. \_\_\_\_\_

7. \_\_\_\_\_

8. \_\_\_\_\_

9. \_\_\_\_\_

10. \_\_\_\_\_

11. \_\_\_\_\_

12. \_\_\_\_\_

13. \_\_\_\_\_

14. \_\_\_\_\_

15. \_\_\_\_\_

16. \_\_\_\_\_

17. \_\_\_\_\_

18. \_\_\_\_\_

19. \_\_\_\_\_

20. \_\_\_\_\_



Solve each problem.

1)  $\frac{5}{6} - \frac{4}{6} =$

2)  $\frac{2}{4} + \frac{1}{4} =$

3)  $\frac{3}{5} - \frac{2}{5} =$

4)  $\frac{4}{12} + \frac{2}{12} =$

5)  $\frac{4}{5} - \frac{1}{5} =$

6)  $\frac{4}{5} + \frac{2}{5} =$

7)  $\frac{2}{3} - \frac{1}{3} =$

8)  $\frac{2}{3} + \frac{2}{3} =$

9)  $\frac{5}{8} - \frac{4}{8} =$

10)  $\frac{7}{10} + \frac{3}{10} =$

11)  $\frac{6}{8} - \frac{2}{8} =$

12)  $\frac{5}{10} + \frac{3}{10} =$

13)  $\frac{3}{4} - \frac{2}{4} =$

14)  $\frac{5}{6} + \frac{3}{6} =$

15)  $\frac{2}{5} - \frac{1}{5} =$

16)  $\frac{9}{12} + \frac{4}{12} =$

17)  $\frac{3}{4} - \frac{1}{4} =$

18)  $\frac{2}{4} + \frac{1}{4} =$

19)  $\frac{2}{5} - \frac{1}{5} =$

20)  $\frac{5}{12} + \frac{1}{12} =$

**Answers**

1. \_\_\_\_\_

2. \_\_\_\_\_

3. \_\_\_\_\_

4. \_\_\_\_\_

5. \_\_\_\_\_

6. \_\_\_\_\_

7. \_\_\_\_\_

8. \_\_\_\_\_

9. \_\_\_\_\_

10. \_\_\_\_\_

11. \_\_\_\_\_

12. \_\_\_\_\_

13. \_\_\_\_\_

14. \_\_\_\_\_

15. \_\_\_\_\_

16. \_\_\_\_\_

17. \_\_\_\_\_

18. \_\_\_\_\_

19. \_\_\_\_\_

20. \_\_\_\_\_



Solve each problem.

1)  $\frac{5}{6} - \frac{4}{6} =$

2)  $\frac{5}{8} + \frac{5}{8} =$

3)  $\frac{2}{10} - \frac{1}{10} =$

4)  $\frac{4}{6} + \frac{4}{6} =$

5)  $\frac{2}{3} - \frac{1}{3} =$

6)  $\frac{1}{2} + \frac{1}{2} =$

7)  $\frac{5}{6} - \frac{4}{6} =$

8)  $\frac{4}{8} + \frac{3}{8} =$

9)  $\frac{6}{8} - \frac{2}{8} =$

10)  $\frac{4}{10} + \frac{4}{10} =$

11)  $\frac{4}{5} - \frac{3}{5} =$

12)  $\frac{7}{10} + \frac{1}{10} =$

13)  $\frac{3}{4} - \frac{2}{4} =$

14)  $\frac{4}{6} + \frac{2}{6} =$

15)  $\frac{5}{6} - \frac{2}{6} =$

16)  $\frac{8}{10} + \frac{3}{10} =$

17)  $\frac{4}{6} - \frac{1}{6} =$

18)  $\frac{4}{10} + \frac{2}{10} =$

19)  $\frac{7}{8} - \frac{2}{8} =$

20)  $\frac{2}{4} + \frac{2}{4} =$

**Answers**

1. \_\_\_\_\_

2. \_\_\_\_\_

3. \_\_\_\_\_

4. \_\_\_\_\_

5. \_\_\_\_\_

6. \_\_\_\_\_

7. \_\_\_\_\_

8. \_\_\_\_\_

9. \_\_\_\_\_

10. \_\_\_\_\_

11. \_\_\_\_\_

12. \_\_\_\_\_

13. \_\_\_\_\_

14. \_\_\_\_\_

15. \_\_\_\_\_

16. \_\_\_\_\_

17. \_\_\_\_\_

18. \_\_\_\_\_

19. \_\_\_\_\_

20. \_\_\_\_\_



Solve each problem.

1)  $\frac{5}{6} - \frac{4}{6} =$

2)  $\frac{8}{10} + \frac{1}{10} =$

3)  $\frac{4}{5} - \frac{2}{5} =$

4)  $\frac{3}{5} + \frac{3}{5} =$

5)  $\frac{2}{3} - \frac{1}{3} =$

6)  $\frac{8}{10} + \frac{8}{10} =$

7)  $\frac{6}{8} - \frac{3}{8} =$

8)  $\frac{7}{12} + \frac{2}{12} =$

9)  $\frac{2}{5} - \frac{1}{5} =$

10)  $\frac{3}{5} + \frac{2}{5} =$

11)  $\frac{3}{5} - \frac{1}{5} =$

12)  $\frac{3}{4} + \frac{2}{4} =$

13)  $\frac{4}{6} - \frac{2}{6} =$

14)  $\frac{2}{3} + \frac{2}{3} =$

15)  $\frac{7}{8} - \frac{1}{8} =$

16)  $\frac{3}{4} + \frac{1}{4} =$

17)  $\frac{2}{4} - \frac{1}{4} =$

18)  $\frac{4}{12} + \frac{3}{12} =$

19)  $\frac{4}{8} - \frac{2}{8} =$

20)  $\frac{2}{4} + \frac{2}{4} =$

**Answers**

1. \_\_\_\_\_

2. \_\_\_\_\_

3. \_\_\_\_\_

4. \_\_\_\_\_

5. \_\_\_\_\_

6. \_\_\_\_\_

7. \_\_\_\_\_

8. \_\_\_\_\_

9. \_\_\_\_\_

10. \_\_\_\_\_

11. \_\_\_\_\_

12. \_\_\_\_\_

13. \_\_\_\_\_

14. \_\_\_\_\_

15. \_\_\_\_\_

16. \_\_\_\_\_

17. \_\_\_\_\_

18. \_\_\_\_\_

19. \_\_\_\_\_

20. \_\_\_\_\_